



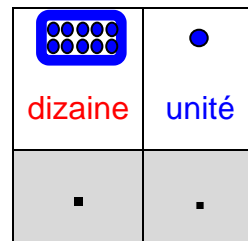



Prénom : _____

Date : _____

Les nombres de 20 à 39

1 Ecris le nombre de lapins.



Il y a lapins.



Il y a lapins.



2 Ecris le résultat.

$$\boxed{10} + \boxed{10} + \boxed{10} + \boxed{5} = \boxed{\dots}$$

$$\boxed{10} + \boxed{10} + \boxed{8} = \boxed{\dots}$$

$$\boxed{20} + \boxed{4} = \boxed{\dots}$$

$$\boxed{30} + \boxed{9} = \boxed{\dots}$$

$$\boxed{30} + \boxed{1} = \boxed{\dots}$$

$$\boxed{20} + \boxed{3} = \boxed{\dots}$$

$$\boxed{20} + \boxed{6} = \boxed{\dots}$$

$$\boxed{30} + \boxed{7} = \boxed{\dots}$$

$$\boxed{30} + \boxed{5} = \boxed{\dots}$$

$$\boxed{20} + \boxed{8} = \boxed{\dots}$$



Prénom :

Date :

Les nombres de 20 à 39

① Ecris le résultat.

$$\boxed{20} + \boxed{5} = \boxed{}$$

$$\boxed{30} + \boxed{6} = \boxed{}$$

② Complète les calculs avec les dizaines et les unités.

$$\boxed{20} + \boxed{5} = \boxed{25}$$

$$\boxed{..} + \boxed{.} = \boxed{31}$$

$$\boxed{..} + \boxed{.} = \boxed{33}$$

$$\boxed{..} + \boxed{.} = \boxed{27}$$

$$\boxed{} + \boxed{} = \boxed{21}$$

$$\boxed{} + \boxed{} = \boxed{32}$$

$$\boxed{} + \boxed{} = \boxed{22}$$

$$\boxed{} + \boxed{} = \boxed{39}$$

③ Observe et complète les suites de nombres.

$$\boxed{22} \text{ --- } \boxed{24} \text{ --- } \boxed{26} \text{ --- } \boxed{28} \text{ --- } \boxed{} \text{ --- } \boxed{} \text{ --- } \boxed{}$$

$$\boxed{21} \text{ --- } \boxed{23} \text{ --- } \boxed{25} \text{ --- } \boxed{27} \text{ --- } \boxed{} \text{ --- } \boxed{} \text{ --- } \boxed{}$$

$$\boxed{28} \text{ --- } \boxed{30} \text{ --- } \boxed{32} \text{ --- } \boxed{} \text{ --- } \boxed{} \text{ --- } \boxed{} \text{ --- } \boxed{}$$

$$\boxed{27} \text{ --- } \boxed{29} \text{ --- } \boxed{31} \text{ --- } \boxed{} \text{ --- } \boxed{} \text{ --- } \boxed{} \text{ --- } \boxed{}$$



$$\boxed{} \text{ --- } \boxed{} \text{ --- } \boxed{} \text{ --- } \boxed{34} \text{ --- } \boxed{36} \text{ --- } \boxed{38} \text{ --- } \boxed{40}$$



Prénom : _____

Date : _____

Les nombres de 20 à 39



1	un
2	deux
3	trois
4	quatre
5	cinq

6	six
7	sept
8	huit
9	neuf

20	vingt
30	trente

31	trente-et-un
32	trente-deux

① Ecris le nombre en chiffres.

trente-et-un

trente-deux

trente-quatre

vingt-neuf

vingt-six

trente-huit

② Ecris le nombre en lettres en cursive.

21

25

37

③ Ecris les nombres dictés par l'adulte.
